





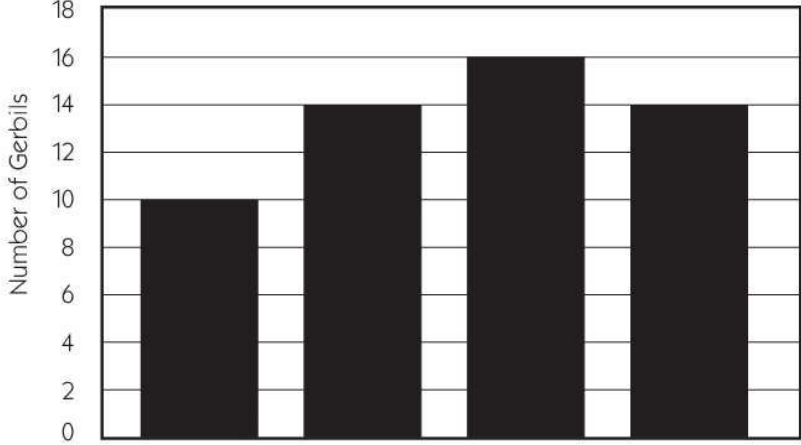










Bridges Student Book For use in Unit Two, Sessions 19 and 20.

NAME _____

DATE _____

Story Problem Choices page 1 of 2

1 Read all five story problems below carefully. Circle the letter in front of the problem you are most interested in solving.

	<p>a Maribel has decided to give pins to the top 5 finishers in the metric marathon. Each pin costs \$3.24. How much did she pay for the 5 pins she bought?</p>										
	<p>b Use your ruler to draw a rectangle that is 22 centimeters long and 15 centimeters wide on a piece of grid paper. Find the area of the rectangle in square centimeters. Attach your paper to page 45.</p>										
	<p>c Joseph is on the swim team. During practice yesterday, he swam 23 laps. If each lap is 25 meters, how many meters did he swim in all?</p>										
	<p>d The pet store at the mall sells gerbils for \$7.00 each. The bar graph shows how many gerbils they sold over 4 weeks. How much money did the pet store collect for the gerbils they sold during Week 3?</p> <div style="text-align: center;">  <table border="1" style="margin: 10px auto;"> <thead> <tr> <th>Week</th> <th>Number of Gerbils</th> </tr> </thead> <tbody> <tr> <td>Week 1</td> <td>10</td> </tr> <tr> <td>Week 2</td> <td>14</td> </tr> <tr> <td>Week 3</td> <td>16</td> </tr> <tr> <td>Week 4</td> <td>14</td> </tr> </tbody> </table> </div>	Week	Number of Gerbils	Week 1	10	Week 2	14	Week 3	16	Week 4	14
Week	Number of Gerbils										
Week 1	10										
Week 2	14										
Week 3	16										
Week 4	14										
	<p>e Brian's family went to the pumpkin patch. Brian spent a dollar and bought 9 things from the list below. What did he buy? Can you find more than one solution?</p> <table border="1" style="margin: 10px auto;"> <thead> <tr> <th>ITEM</th> <th>COST</th> </tr> </thead> <tbody> <tr> <td> mini-pumpkins</td> <td>25¢ each</td> </tr> <tr> <td> apples</td> <td>10¢ each</td> </tr> <tr> <td> corn</td> <td>5¢ each</td> </tr> </tbody> </table>	ITEM	COST	 mini-pumpkins	25¢ each	 apples	10¢ each	 corn	5¢ each		
ITEM	COST										
 mini-pumpkins	25¢ each										
 apples	10¢ each										
 corn	5¢ each										